

GENERALIZING TRANSFORMATIONS

1. Describe the transformation of the following functions.

a. $f(x) + 3$ _____

b. $g(x + 3)$ _____

c. $h(x - 2) - 1$ _____

d. $w(2x)$ _____

e. $-f(x) + 1$ _____

f. $\frac{1}{2} k(x - 2) + 1$ _____

g. $h(-x) + 5$ _____

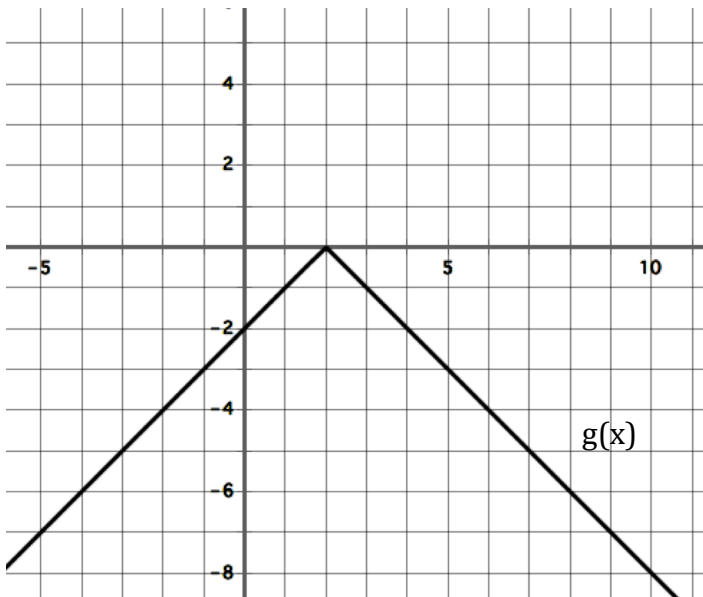
h. $-2g(x + 3) + 1$ _____

i. $-j(\frac{3}{4} x)$ _____

j. $-3k(-2x) + 2$ _____

2. For the following graphs, sketch the transformations indicated. Then, write the equation of the transformed functions using the **function notation** given in the graph.

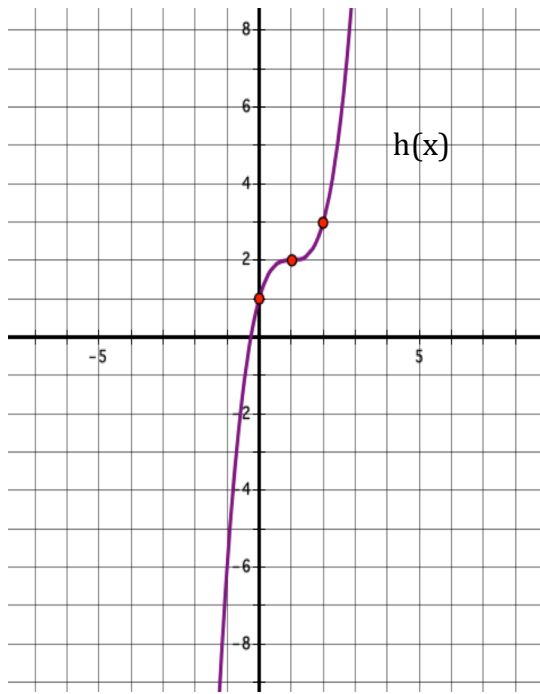
a.



Shift $g(x)$ 2 units left, reflect about the x -axis, and shift 3 units up.

Equation: _____

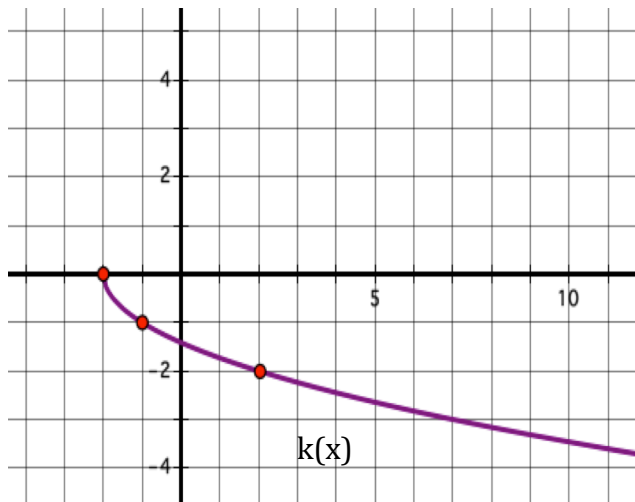
b.



Shift $h(x)$ 3 units to the left, reflect about the x -axis, and shift 4 units down.

Equation: _____

c.



Shift $k(x)$ 2 units to the right, reflect about the x -axis, and shift one unit up.

Equation: _____

3. Write the equations of the transformed functions described below.

- a. The graph of $f(x) = |x|$ is shifted to the left by 4 units, stretched vertically by a factor of 2, reflected about the x-axis, and shifted up by 1 unit.

$$g(x) = \underline{\hspace{10em}}$$

- b. The graph of $g(x) = 2^x$ is shifted to the right by 2 units, compressed vertically by a factor of $\frac{1}{5}$, and shifted down by 1 unit.

$$h(x) = \underline{\hspace{10em}}$$

- c. The graph of $h(x) = \frac{1}{x}$, is shifted to the right by 5 units, stretched vertically by a factor of 3, reflected about the x-axis, and shifted down by 2 units.

$$j(x) = \underline{\hspace{10em}}$$

4. Write the equation of the transformed graphs.

- a. The graph of $y = f(x - 2) + 1$ is shifted 3 units to the left and 3 units down.

- b. The graph of $y = g(x + 3) - 2$ is shifted 1 unit to the left and 1 unit down.

- c. The graph of $y = h(x + 1) + 2$ is shifted 1 unit to the right, 4 units down, stretched vertically by a factor of 3, and reflected about the x-axis.

- d. The graph of $y = -k(x) - 2$ is reflected about the y-axis, reflected about the x-axis, and shifted up 5 units.