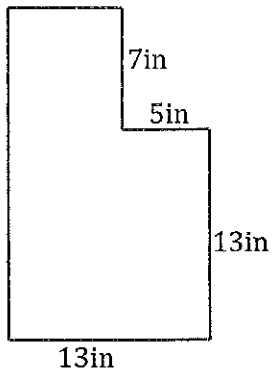


Find the area of each shape.

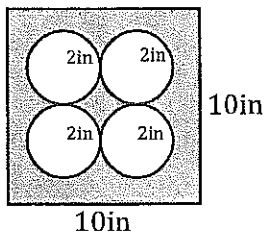
Name: _____

Pd _____ Date: _____

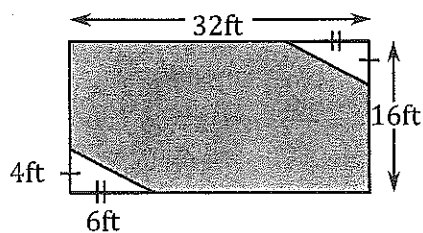
7.



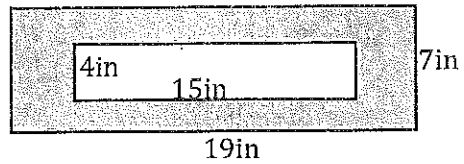
9. Find the shaded area.



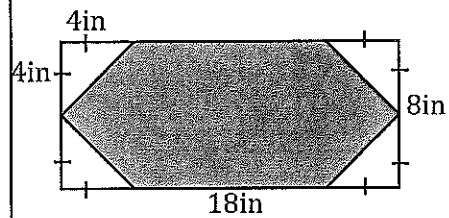
11. Find the shaded area.



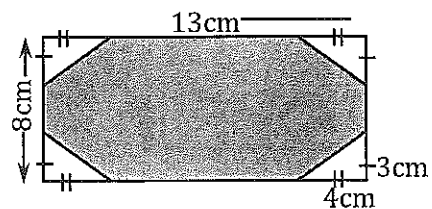
8. Find the shaded area.



10. Find the shaded area.



12. Find the shaded area.



Find the area of each shape.

13. Find the shaded area.

