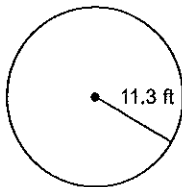


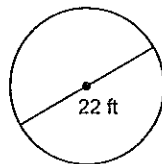
G6a: Area and Circumference Practice

Find the circumference of each circle. Use your calculator's value of π . Round your answer to the nearest tenth.

1)



2)

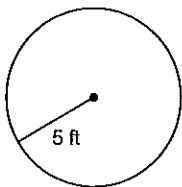


3) radius = 2 mi

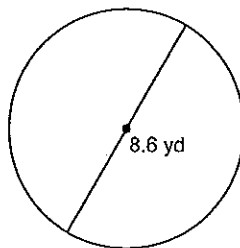
4) diameter = 8 mi

Find the area of each. Use your calculator's value of π . Round your answer to the nearest tenth.

5)



6)



7) radius = 8 km

8) diameter = 8.4 ft