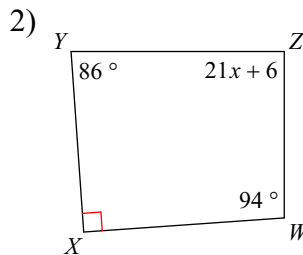
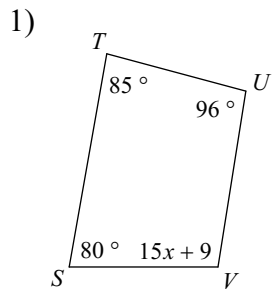


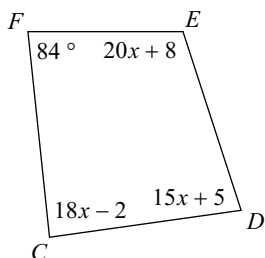
G5: B Level Test Review

Solve for x .

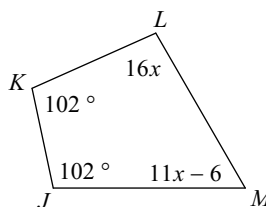


Find the measure of each angle indicated.

3) $m\angle C$

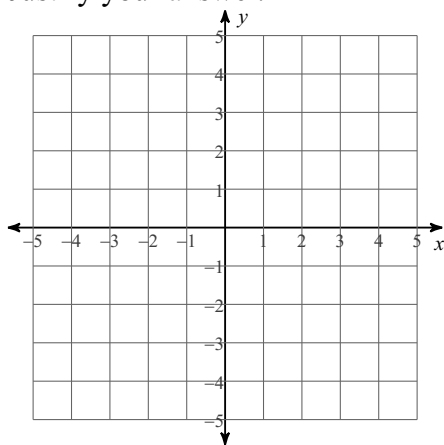


4) $m\angle M$



Plot A(-4, 2) B(0, 5) C (5, 4) and D (-3, -2)

5) What kind of quadrilateral is ABCD?
 Justify your answer.



Plot points W(-5, 0) X(1, 4) Y(3, 1) & Z (-3, -3)

6) What type of quadrilateral is WXYZ?
 Justify your answer.

