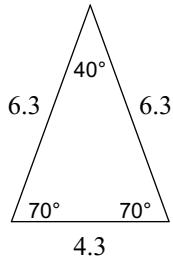


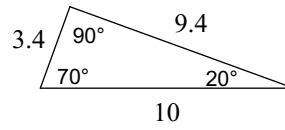
G5 C Level Test Review

Classify each triangle by its angles and sides.

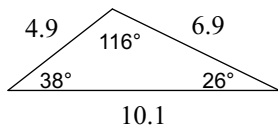
1)



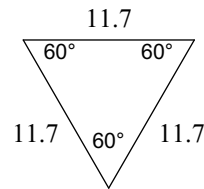
2)



3)

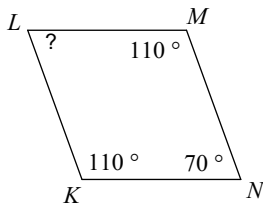


4)

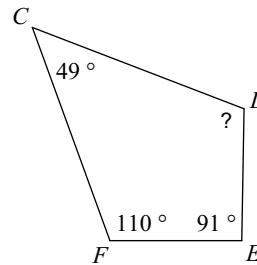


Find the measure of each angle indicated.

5)

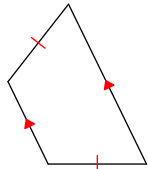


6)

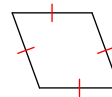


State the most specific name for each figure.

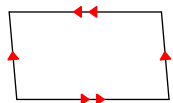
7)



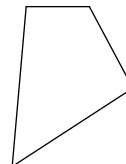
8)



9)

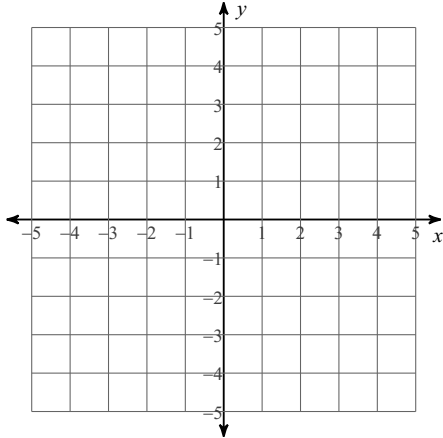


10)

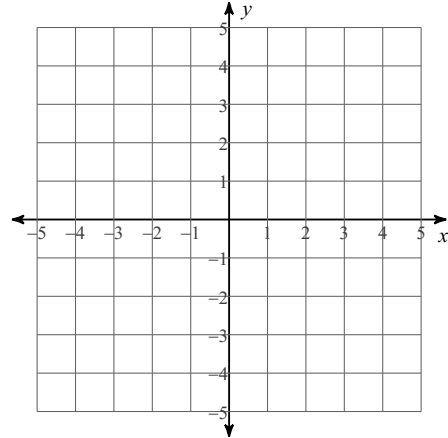


Plot and connect each point. Then state what kind of triangle it is and justify your conclusion.

11) W (-3, 3), I (2, 4) and N (4, 2)

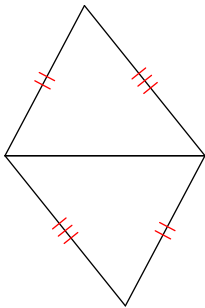


12) Y (-1, -3), U (2, 1) and M (4, -3)

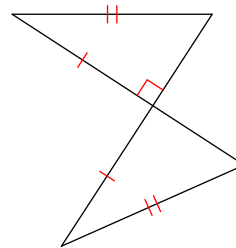


State if the two triangles are congruent. If they are, state how you know.

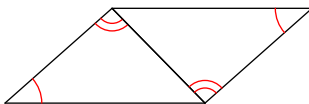
13)



14)



15)



16)

