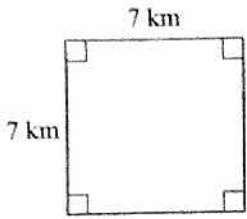


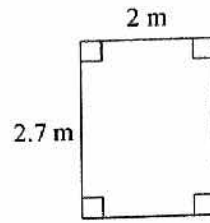
Homework 1.1 Due 9/9 or 9/10

Find the area and perimeter of each.

1)



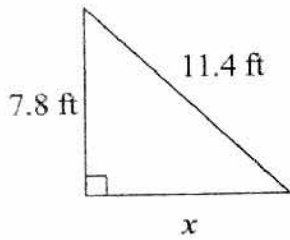
2)



For problems 3 and 4:

- a) Find the missing side of each triangle. Round to two decimal places, if necessary.
- b) Find the area and perimeter of each triangle.

3)



4)

