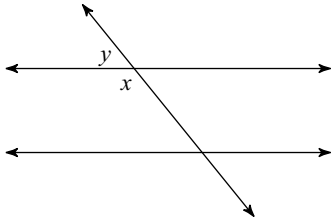


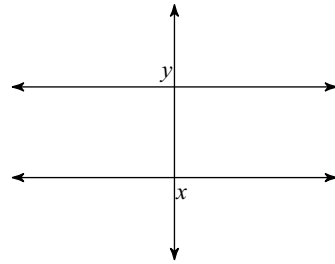
HW 2.6 Due 10/26 or 10/27

Identify each pair of angles as corresponding, alternate interior, alternate exterior, same-side interior, same-side exterior, vertical, or adjacent (linear pair).

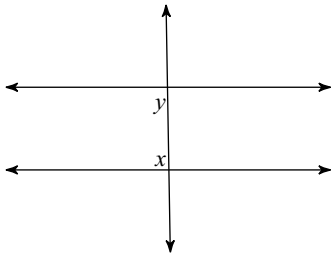
1)



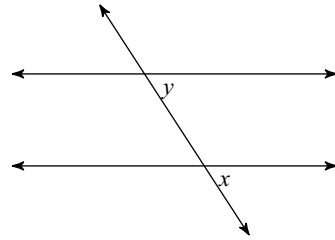
2)



3)

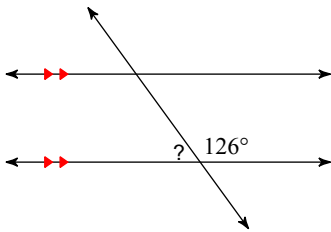


4)

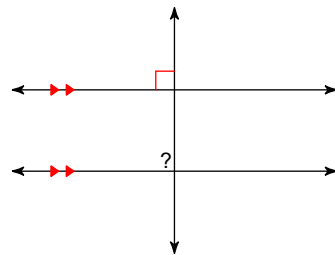


Find the measure of each angle indicated.

5)

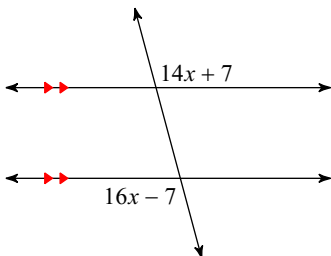


6)



Solve for  $x$ .

7)



8)

