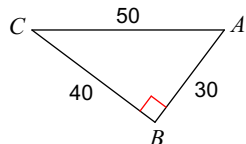


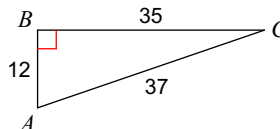
HW 4.3 Due 12/3 or 12/4

Find the value of each trigonometric ratio.

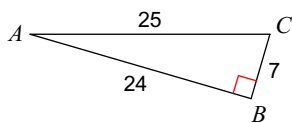
1) $\sin C$



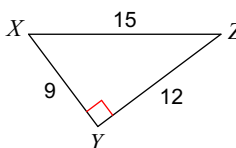
2) $\cos A$



3) $\tan A$

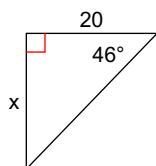


4) $\cos X$

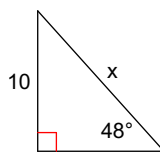


Find the missing side. Round to the nearest hundredth.

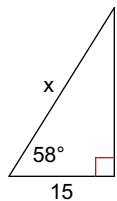
5)



6)



7)



8)

