

HW 4.4 Due 12/7 or 12/8

Find the value of each trigonometric ratio to four decimal places.

1) $\sin 40^\circ$

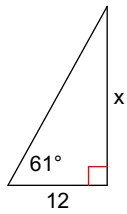
2) $\cos 74^\circ$

3) $\tan 68^\circ$

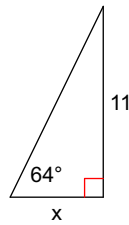
4) $\tan 70^\circ$

Find the missing side. Round to the nearest hundredth.

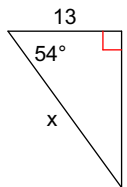
5)



6)



7)



8)

