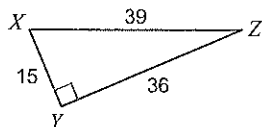


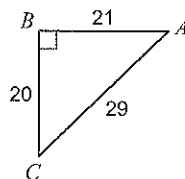
HW 4.6

Find the value of each trigonometric ratio.

1) $\tan Z$

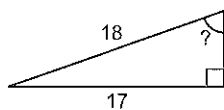


2) $\cos A$

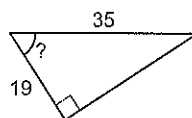


Find the measure of the indicated angle to the nearest degree.

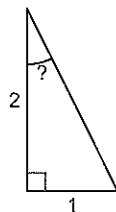
3)



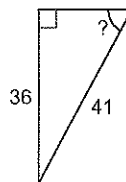
4)



5)

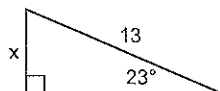


6)



Find the missing side. Round to the nearest tenth.

7)



8)

