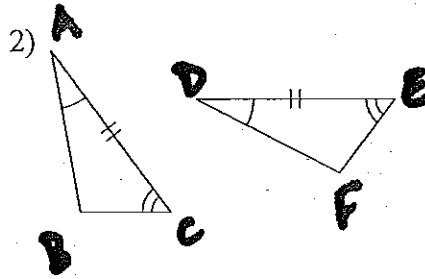
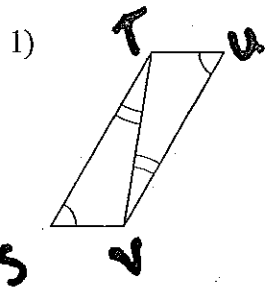


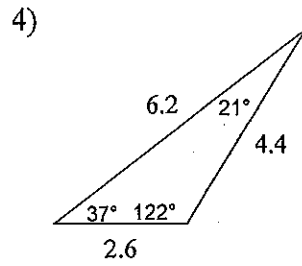
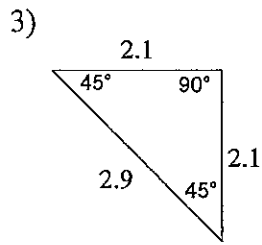
HW 5.6 Due 2/16 or 2/17

Date _____ Period _____

Make a flow chart or two-column proof to show whether or not the triangles are congruent.



Classify each triangle by its angles and sides.



State the most specific name for each figure.

