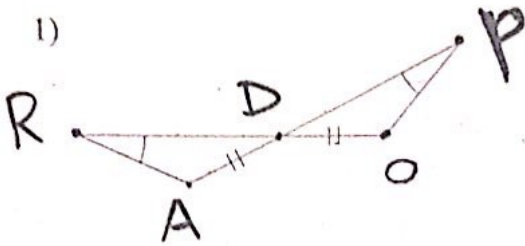


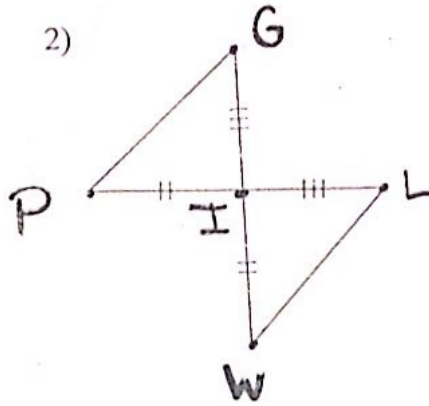
HW 5.7 due 2/18 or 2/19

State if the two triangles are congruent. If they are, write a flow chart or a two column proof to justify your answer.

1)

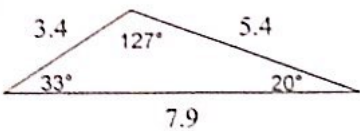


2)

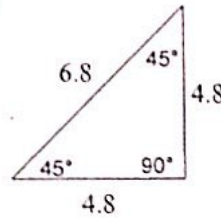


Classify each triangle by its angles and sides.

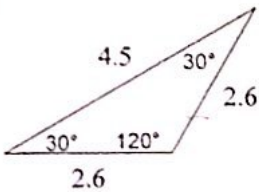
3)



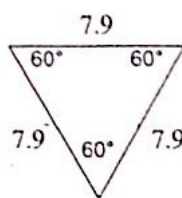
4)



5)

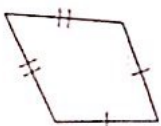


6)



State the most specific name for each figure.

7)



8)

