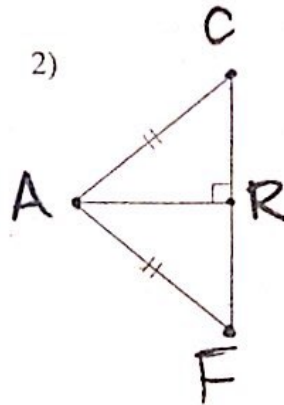
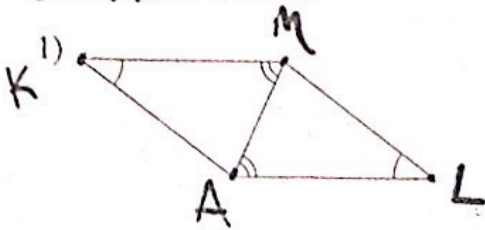
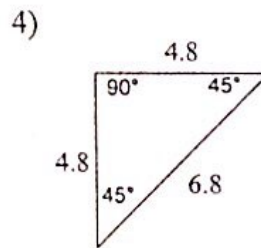
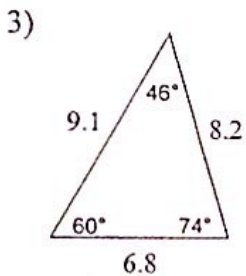


HW 5.8 due 2/22 or 2/23

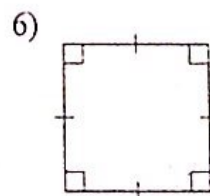
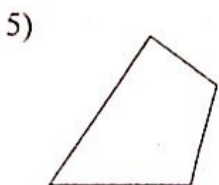
State if the two triangles are congruent. If they are, write a flow chart or a two column proof to justify your answer.



Classify each triangle by its angles and sides.



State the most specific name for each figure.



Find the measure of each angle indicated.

