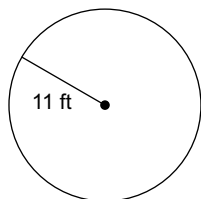


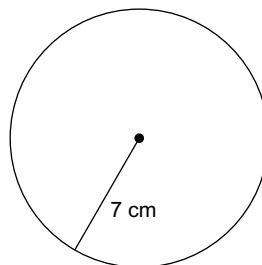
HW 6.1 Due 3/1 or 3/2

**Find the diameter of each circle. Round your answer to the nearest hundredth.**

1)

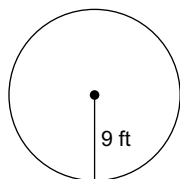


2)

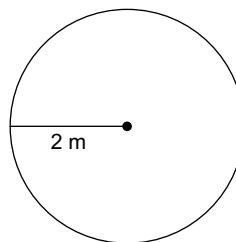


**Find the circumference of each circle. Round your answer to the nearest hundredth.**

3)

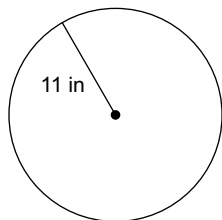


4)

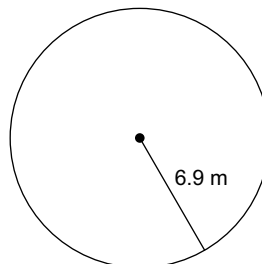


**Find the area of each circle. Round your answer to the nearest hundredth.**

5)



6)



**Find the diameter of each circle. Round your answer to the nearest hundredth.**

7) circumference = 37.7 km

8) area = 12.6 yd<sup>2</sup>

**Find the radius of each circle. Round your answer to the nearest hundredth.**

9) circumference = 18.8 mi

10) area = 254.5 cm<sup>2</sup>